



Subtraction


$5 - 2 = \underline{3}$




$6 - 2 = \underline{\quad}$




$4 - 1 = \underline{\quad}$



$7 - 5 = \underline{\quad}$



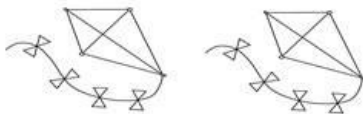
$6 - 3 = \underline{\quad}$




$3 - 1 = \underline{\quad}$



$2 - 1 = \underline{\quad}$



$8 - 1 = \underline{\quad}$



Count the items. Use the pictures to solve the problems. The first one is an example.